



INDIAN SCHOOL AL WADI AL KABIR

DEPARTMENT OF MATHEMATICS (2023 – 2024)

TOPIC: NUMBER CONCEPTS (101-200)

WORKSHEET 1

RESOURCE PERSON: Ms. Mariyam L










(ANSWER KEY)

NAME: _____ CLASS: II SEC: _____ DATE: _____

Q1. Write the number names for the given numbers. Do not forget to begin the number name with a capital letter.

1. 175 - One hundred seventy five
2. 200 - Two hundred
3. 100 - One hundred
4. 163 - One hundred sixty three
5. 119 - One hundred nineteen

Q2. Fill the missing numbers with numbers before, after or between.

Before	Between	After
		
		
		

Q3a. Shade the box with the largest number.

113 189 ✓ 163

Q3b. Shade the box with the smallest number.

200 145 126 ✓

Q4. Write the place and place value of the given numbers.

104

PLACE	PLACE VALUE
Ones	4
Tens	00
Hundreds	100

200

PLACE	PLACE VALUE
Ones	0
Tens	00
Hundreds	200

Q5. Write the place and place value of the underlined digit.

NUMBER	PLACE	PLACE VALUE
1 <u>8</u> 6	Tens	80
15 <u>1</u>	Ones	1
<u>1</u> 35	Hundreds	100